


Match the Symbols


Name _____ Class _____

Use the Symbol Bank to


Draw the ^{music} symbols to their proper boxes. (from middle of page)




Whole-note




Half note




Quarter Note



Eighth Note




Forte




Piano




Bass clef




Treble Clef




Sharp



Flat

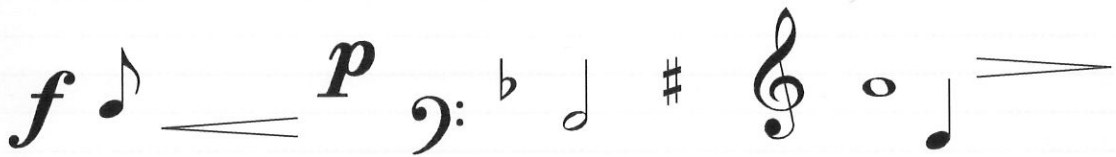


Crescendo



Decrescendo

Symbol Bank



Add or subtract the problem, then draw the ^{Notes} symbols to their proper boxes. (from below boxes).

$$1 - 1/2 =$$

$$3 - 2 =$$

$$6 - 2 =$$

$$1 + 1 =$$

$$5 - 3 =$$

$$8 - 4 =$$

$$4 - 2 =$$

$$3 + 1 =$$

Note Bank

